
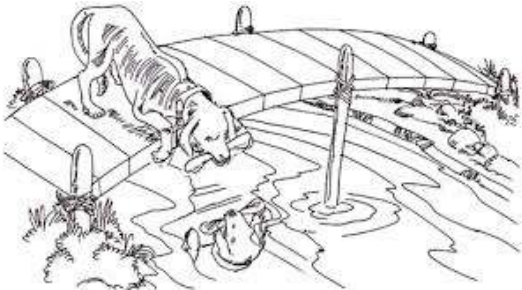



JKG International School, Indirapuram
Holiday Homework (2018-19)
Class: II
Subject: English
Topic – Story Writing

Name **Sec:** **Roll No.** **Date:.....**

Q1 Look at the picture and complete the given story and also write a suitable title.

Title - _____



There was a _____ named Bruno. He found a piece of _____. He wanted to _____ it alone. He went near a pool of _____. He saw his _____ in the water. He thought that there was another _____ in the water. He wanted to get his piece of _____ also. He barked at it. His own piece of meat _____ into the water. He felt _____ and went away.

Moral :- _____

Q2 Write a paragraph on 'How we celebrate New Year ' using the given clues.

midnight celebration with friend s/relatives -----cards , gifts , party ----- winter break 31st December -
 ---- delicious food ---- Special TV programmes----- resolution----- messages -----wishes etc

This image shows a blank sheet of white paper with horizontal ruling lines. The lines are evenly spaced and run across the width of the page. There are no margins, text, or other markings on the paper.

Q3 Write the meaning of the given words

- a) gap _____ b) precious _____ c) alone _____
d) rudeness _____ e) journey _____ f) politely _____

Q4 Answer the following questions :

- a) Who came to help Cubby ?

- b) What does Trixie do when she gets happy ?

Ans _____

- c) Why was the water in the pond drying up ?

Ans _____

जेकेजी इंटरनेशनल स्कूल, इंदिरापुरम
शीतकालीन अवकाश कार्य (2018-19)
कक्षा – दो
विषय – हिंदी

प्र०1 दिये गये अपठित गद्यांश को पढ़कर पूछे गए प्रश्नों के उत्तर दीजिए।

लखनऊ एक पुराना शहर है। इसे नवाबों का शहर भी कहा जाता है। यह उत्तर प्रदेश की राजधानी है। यहाँ का चारबाग रेलवे स्टेशन बहुत विशाल तथा सुंदर है। इसकी इमारत देखने योग्य है। अमीनाबाद यहाँ का प्रमुख बाज़ार है। यह शहर गोमती नदी के तट पर बसा है।

(क) लखनऊ को किसका शहर कहा जाता है ?

(ख) यह कौन से प्रदेश की राजधानी है ?

(ग) यहाँ का प्रमुख बाज़ार कौन सा है ?

(घ) लखनऊ शहर किस नदी के तट पर बसा हुआ है ?

प्र०2 दी गयी कविता की पंक्तियाँ पढ़कर पूछे गए प्रश्नों के उत्तर लिखिए—

बिल्ली एक बड़ी पाजी है
रहती हर दम घात लगाए,
न जाने कब किसे दबोचे
किसको चट कर जाए।

सो जाओ सब लोग लगाकर
दरवाजे पर किल्ली,
आजादी का जश्न देखने
मैं जाता हूँ दिल्ली।

क) बिल्ली को कैसा बताया गया है ?

ख) चूहा दरवाजे पर क्या लगाने को कह रहा है ?

ग) दी गई कविता का शीर्षक लिखिए ।

घ) चूहा कौन से शहर जाने की बात कर रहा है ।

प्र०3 अपना मनपसंद चित्र बनाकर उसके बारे में कोई पाँच वाक्य लिखिए।

JKG International School, Indirapuram
Holiday Homework (2018-19)
Class: II
Subject: Math

Name: **Section:** **Roll No.:** **Date:**.....

Q1. Tick ($\sqrt{\quad}$) and write the correct answer.

a) _____ is used to measure lengths accurately in centimeters.

i) cubit

ii) scale

iii) pace

b) All sides of _____ are equal.

i) square

ii) rectangle

iii) triangle

c) The result of division is called the _____.

i) quotient

ii) remainder

iii) divisor

d) Data handling is collecting data in order to keep a _____.

i) report

ii) measurement

iii) record

e) _____ is the unit to measure weight of pumpkin.

i) gram

ii) kilogram

iii) litre

Q2. Fill in the blanks.

a) The standard unit of measuring length is _____.

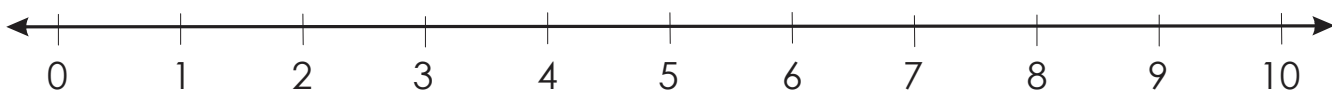
b) Straight lines which are neither vertical nor horizontal are called _____.

c) _____ is the unit to measure the water in a cup.

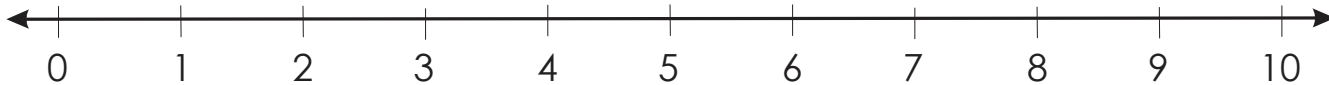
d) The length of the thumb to little finger is a _____.

Q3. Do division on number line.

a) 10 divided by 5




b) 8 divided by 2



Q4. Complete the following.

a)



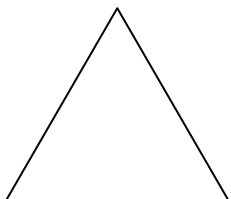
Name- _____

Faces- _____

Edges- _____

Corners - _____

b)



Name - _____

Sides - _____











Corners - _____


Q5. Divide the following.

a) $4 \overline{) 24}$

b) $5 \overline{) 35}$

Q6. Seema made a list of books in her library. Read the information given and answer the following questions.

Subject	Number of books
Math	  
Hindi	 
English	   
Science	

1  = 10 books

- a) The subject having maximum number of books is _____
- b) Maths books are lesser than _____ books.
- c) Hindi books are more than _____ books.
- d) The subject having least number of books is _____.

Q7. Solve the given word problems.

- a) 45 books are to be distributed equally among 9 children. How many books will each child will get? (use repeated subtraction method)

b) There are 36 chairs in a hall. If we put 6 chairs in a row, how many rows of chairs are there?

c) Raja has to fill 16 glasses of water. If he fills 4 glasses in a minute, how many minutes will he take to fill all the glasses?

JKG International School, Indirapuram
Holiday Homework: (2018-19)
Class: II
Subject: EVS

Name: **Section:** **Roll No.:** **Date:**

Q1. Tick (✓) the correct answer:

- a) Snow on mountains melts to become _____.
i) desert ii) river iii) land
- b) Harbours are found in coastal areas like _____.
i) Mumbai ii) Delhi iii) Punjab
- c) Things that we can use are called _____.
i) sources ii) resources iii) force
- d) We can fly like a _____ in an aeroplane.
i) tiger ii) bird iii) whale
- e) You can send an e-mail through the _____.
i) computer ii) radio iii) television

Q2. Fill in the blanks:

- a) _____ travels under the water.
- b) Our Earth is surrounded by an envelope of air called the _____.
- c) A _____ is a form of written form of communication.
- d) _____ from vehicles makes the air dirty.
- e) The _____ is the brightest star seen from the Earth.

Q3. Correct and rewrite the following sentences:

- a) The sun is our nearest neighbour in the sky.

- b) The planet is the model of the Earth.


- c) Letter is a means of mass communication.

d) Walk slow and do not run on the road.

Q4. Circle the odd one out:

- | | | | | |
|----|--------|--------|--------|----------|
| a) | CNG | tempo | petrol | diesel |
| b) | Sun | Moon | Stars | Earth |
| c) | land | bird | air | water |
| d) | letter | mobile | radio | postcard |

Q5. Identify the picture and answer the following questions:



a) Name the vehicle.

b) Which type of transport is this?

c) Name the place where this vehicle lands and takes off.

d) Give two more examples of this type of transport.

Q6. Write two examples of each:

i) Earth's neighbours- _____ , _____

ii) Water transport - _____ , _____